

Solve with counters. Complete each number sentence.

- ① Max has 4 red cars and 5 green cars. How many cars does Max have all together?



___ ○ ___ ○ ___

- ② Emma has 9 apples. She uses 8 to make a pie. How many apples does she have left?




___ ○ ___ ○ ___

- ③ Jordan has 7 cherries. He has two bowls. He puts 4 into one bowl. How many cherries are in the other bowl?



___ ○ ___ ○ ___

- ④ Will picks 8 plums. Jess gives Will 4 more plums. Then Will eats 2 plums. How many plums does Will have now?



___ ○ ___ ○ ___
___ ○ ___ ○ ___




Look at the page. In which problem did you add and subtract? _____


Name _____

Draw a picture to solve. Write the number sentence.

- ① Terry has 12 beads.
She used 8 on a necklace.
How many beads does she
have left?



- ② Lucas made 9 drawings.
Then he made 7 more drawings.
How many drawings did he
make in all?



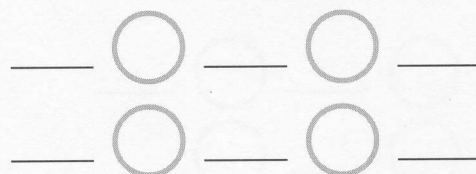
- ③ Ms. Smith bought 16 tomatoes.
She put 5 in a salad. How
many tomatoes does she
have left?




- ④ Sam put 13 flowers in a
vase. He put 7 yellow flowers
in the vase. The rest are
red. How many red flowers
are in the vase?



- ⑤ Frances bought 11 pencils.
Then she buys 8 more. She gives
2 pencils to Sally. How many
pencils does she have now?



- ⑥ Joe has 14 green stamps
and 3 blue stamps. He uses
4 stamps. How many stamps
does he have left?

**Tell how you know what number sentence to write.**

Write a number sentence for each word problem. Then solve.

- ① Dia has 14 skirts. She puts 6 in a suitcase. The rest are in her closet. How many skirts are in her closet?

___ ○ ___ ○ ___

- ② Mr. Ramos has 8 ties with stripes and 5 ties with dots. How many ties does he have in all?

___ ○ ___ ○ ___

- ③ Charlie has 9 pairs of socks. His father buys him 6 more pairs of socks. How many pairs of socks does Charlie have now?

___ ○ ___ ○ ___

- ④ Alex has 10 caps. Cassie has 8 caps. How many more caps does Alex have?

___ ○ ___ ○ ___

- ⑤ Mr. Thorn bought 6 blueberry muffins and 8 banana muffins. His children ate 3 muffins. How many muffins are left?

___ ○ ___ ○ ___
___ ○ ___ ○ ___

- ⑥ There are 16 rolls on a plate. James ate 3 rolls. Then Isaac ate 2 rolls. How many rolls are left?

___ ○ ___ ○ ___
___ ○ ___ ○ ___

- ⑦ Mrs. Bella bought 7 pizzas with pepperoni. She bought 2 plain pizzas. Her students ate 4 of the pizzas. How many pizzas are left?

___ ○ ___ ○ ___
___ ○ ___ ○ ___

- ⑧ There were 20 crackers on a plate. Sam ate 6 crackers. Then Rachel ate 7. How many crackers are still on the plate?

___ ○ ___ ○ ___
___ ○ ___ ○ ___



Tell how you solved Problem 8.

Write a number sentence to solve each problem.

- ① Sonia and Jay have 15 peaches all together. Sonia has 7 peaches. How many peaches does Jay have?
- _____

- ② Wendy had 6 purple beads and 5 green beads. Then she used 3 beads on a bracelet. How many beads does Wendy have now?
- _____

- ③ We have 16 tarts. We have 3 more tarts in the oven. How many tarts do we have in all?
- _____

- ④ Caden bakes 5 blueberry muffins and 7 lemon muffins. Her family eats 8 muffins. How many muffins does she have now?
- _____

Choose the correct answer for each problem.

- ⑤ Fred has 7 melons. He sells 3 at the market. Then he eats 1. How many melons does he have left?

a) 3
b) 4
c) 5
d) 2

- ⑥ The Tigers scored 9 goals in all. They scored 4 goals in the second half of the game. How many goals did they score in the first half?

a) 3
b) 4
c) 5
d) 2